

**Answers:**


**1. Rectangle**




**2. Isosceles Triangle**




**3. Equilateral Triangle**



**4. Scalene Triangle**



**5. Square**



**6. Parallelogram**

